
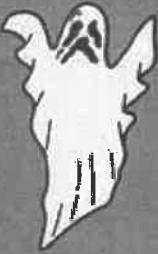





Station 1




Find the value of the question mark.

Can you solve this?

 + + = 12

 +  = 20

 +  = 14

 +  *  = ?

Station 2

1. $x + 8 < 9$

*GRAPH the solution set as well

2. $z - 10 > -3$

3. $4x \geq 24$

*GRAPH the solution set as well

4. $-5x > -30$

Station 3

Find the value of each shape

$$\text{Spiderweb} - \text{Spider} = \text{Owl}$$

$$\text{Spider} + \text{Spider} = \text{Gravestone (RIP)}$$

$$\text{Gravestone (RIP)} + \text{Gravestone (RIP)} = \text{Owl}$$

$$\text{Spider} = 2$$

3

Station 4

1. $2x + 9 \geq 15$

2. $\frac{y}{7} + 1 < 2$

GRAPH the solution set as well

3. $-7x - 3 \leq 18$

Station 5


Find the value of each shape.



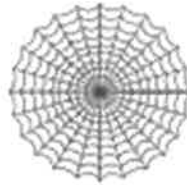
=



+



+



=




+



=



= 15



U3 LT1/2 Halloween Stations Review

Station 1

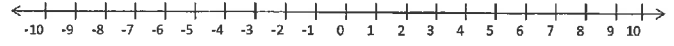
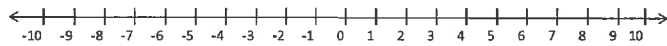
Station 2

1.





2.

3.

4.



Station 3

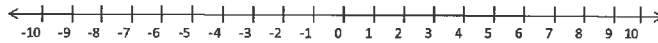
 =  =  =  =

Station 4

1.

2.

3.



Station 5



Station 6

1.

2.

3.

